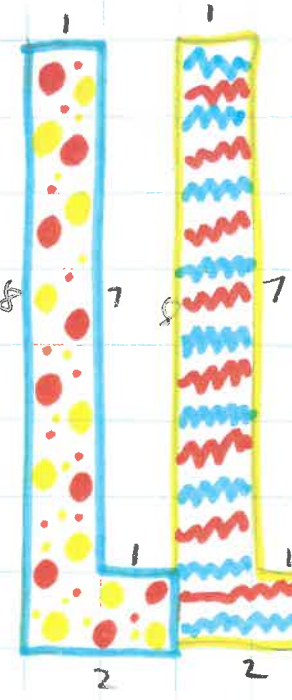




E  
 $P = 39 \text{ cm}$   
 $A = 30 \text{ cm}^2$




L x 2  
 $P = 19 \text{ cm}$   
 $A = 9 \text{ cm}^2$




O  
 $P = 16 \text{ cm}$   
 $A = 12 \text{ cm}^2$



U  
 $P = 22 \text{ cm}$   
 $A = 10 \text{ cm}^2$



S  
 $P = 16 \text{ cm}$   
 $A = 5 \text{ cm}^2$



e  
 $P = 36 \text{ cm}$   
 $A = 15 \text{ cm}^2$